

BUILD IT GAMES

Find the answer:

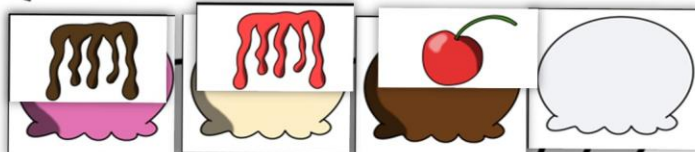
$$15 - 9 = \square$$

$$9 + \square = 15$$

#4

© The Lifetime Learner

My Ice Cream Sundae



...st have 10 items in your ice c...

1st
math

40
games

WHAT IS THIS?

Students get to “build” a different theme in every game. They add a piece each time they answer a question correctly.
The first one to finish wins!

Students are building a soccer field in this example.

My Soccer Field

The boy worked on his homework for 8 hours in the morning and another 3 hours in the afternoon. How many total hours did he spend working on homework?

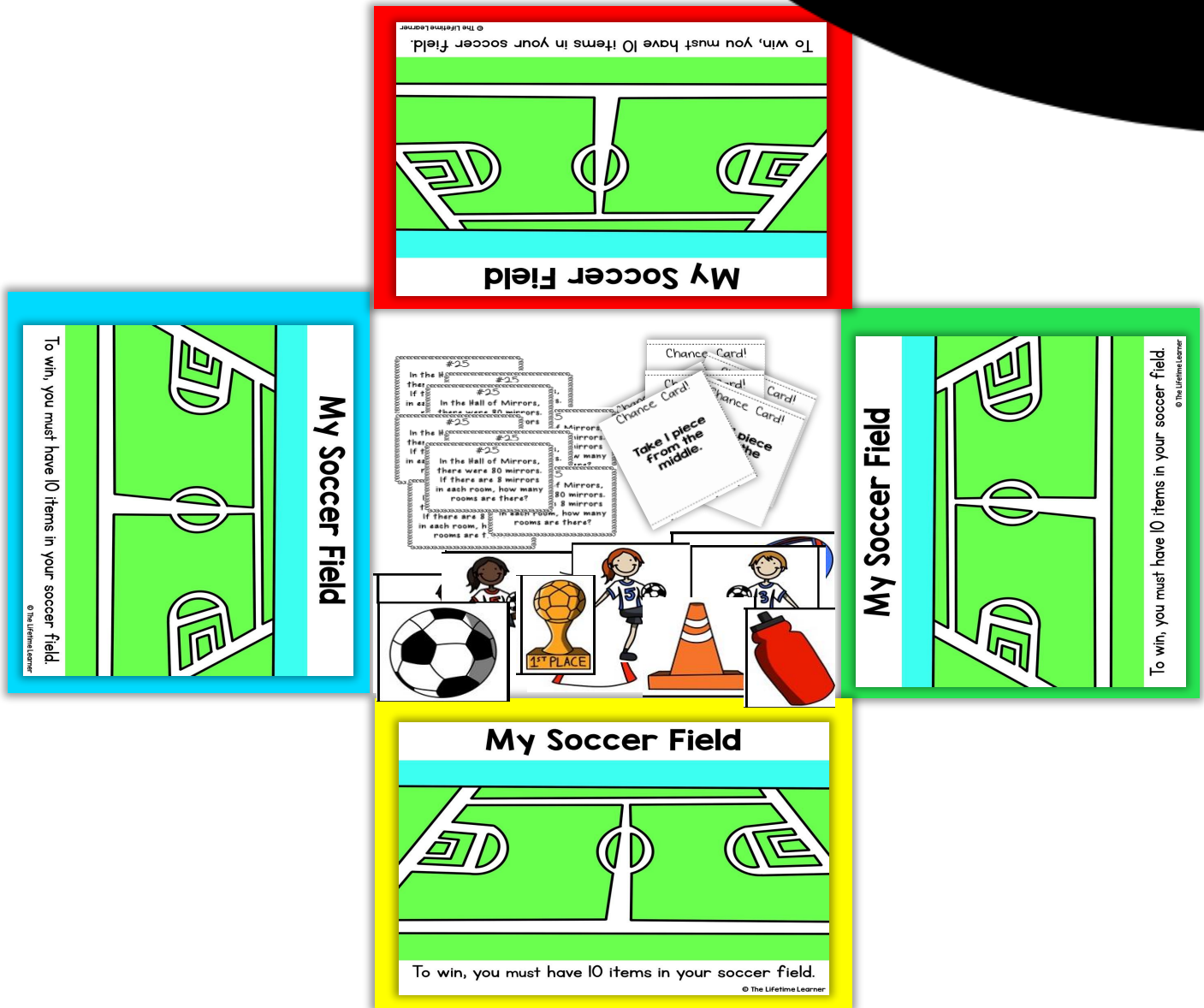
#1

To win, you must have 10 items in your soccer field.

© The Lifetime Learner

HOW TO PLAY

STEP 1



Each player gets a background to build their soccer field on.


Playing cards and soccer pieces go in the middle.

HOW TO PLAY

STEP 2

The boy worked on his homework for 8 hours in the morning and another 3 hours in the afternoon. How many total hours did he spend working on his homework?

My Soccer Field



To win, you must have 10 items in your soccer field.

© The Lifetime Learner

Each time you get an answer correct, you earn a piece for your soccer field.

HOW TO PLAY

STEP 3

Chance cards are provided to spice up game play. You never know who's going to win with these included!

My Soccer Field



must have 10 items in your soccer field.

© The Lifetime Learner




STEP 4



The first person to finish getting 10 items on their soccer field wins!

WHAT'S INCLUDED?

- 
- **40 GAMES**
 - **40 THEMES**
 - **40 SKILLS**
 - **EASY TO PLAY**
 - **EASY TO DIFFERENTIATE**
 - **COLOR & BLACK/WHITE**
 - **ANSWER KEYS**

2 VERSIONS



COLOR




BLACK & WHITE

DIGITAL OPTION

There is NO PREP with the digital version in Google Slides! Students simply move a piece from the side onto their digital gameboard each time they answer a task card correctly.



CHANGE THE CONTENT



Don't teach math?
Haven't covered
one of the concepts
yet?

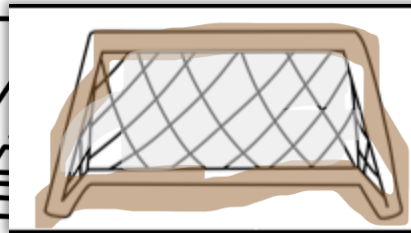
No problem! Simply
swap out the set of
task cards you don't
need with a set
you'd like to use
instead.

The 40 "Build It"
games can be
used with ANY set
of task cards
(reading, math,
science, social
studies)....the
possibilities are
endless!

LET KIDS COLOR


**Short on time?
Print the black and white
version and let kids color
their own decorations!**

My Soccer Field



To win, you must have 10 items in your soccer field.

© The Lifetime Learner



CLEAR DIRECTIONS FOR STUDENTS



Simple, printable directions are included for you to place next to each game.

40 TASK CARD SETS

$$46+10$$

$$3+3+7$$

Write the missing fact family.

$$2-0=2$$

$$2-2=0$$

$$0+2=2$$

Write the missing fact family.

$$6+1=7$$

$$1+6=7$$

$$7-1=6$$

1st Grade Task Cards:

1. BAR GRAPHS & PICTOGRAPHS
2. COMPARE 3 OBJECT LENGTHS
3. GEOMETRY
4. CREATE NEW SHAPES
5. HALVES & FOURTHS
6. IDENTIFY COINS
7. MEASURE TO NEAREST INCH
8. MEASURE WITH CUBES
9. NONSTANDARD MEASUREMENT
10. TELL TIME TO THE HALF HOUR
11. ADD & SUBTRACT WORD PROBLEMS
12. ADD ON NUMBER LINES
13. ADD TO 100
14. ADDITION FACTS TO 10
15. ADDITION FACTS TO 20
16. SUBTRACT MULTIPLES OF 10
17. SUBTRACT ON NUMBER LINES
18. SUBTRACTION UNKNOWN ADDENDS
19. SUBTRACTION FACTS TO 10
20. SUBTRACTION FACTS TO 20
21. FIND 10 MORE / 10 LESS
22. ADD 3 NUMBERS
23. ADD & SUBTRACT FACT FAMILIES TO 10
24. ADD & SUBTRACT FACT FAMILIES TO 20
25. ADD & SUBTRACT FACT FAMILY TRIANGLES
26. ASSOCIATIVE PROPERTY OF ADDITION
27. COMMUTATIVE PROPERTY OF ADDITION
28. RELATE COUNTING TO ADDITION
29. RELATE COUNTING TO SUBTRACTION
30. TRUE OR FALSE EQUATIONS
31. COUNT TO 120
32. COMPARE 2 DIGIT NUMBERS
33. FILL IN MISSING NUMBERS 1-100
34. FILL IN MISSING NUMBERS 1-120
35. FIND MISSING NUMBERS 1-20
36. PLACE VALUE TO 100: EXPANDED FORM
37. PLACE VALUE TO 100: BASE TEN BLOCKS
38. PLACE VALUE TO 100: WORD FORM
39. PLACE VALUE TO 100: TENS & ONES
40. MISSING NUMBERS IN A HUNDREDS CHART

Use your addition and subtraction abilities to figure out the missing number in each fact family triangle.



er when the two
re combined.

$$8 = 19$$

$$8 = 19$$

Find the answer.

$$3+q=$$
$$q+3=$$

$$7-3=4$$

False?

#2

21	22	23	24	25	26	27	28	29	30
31	32	33	34	35	36	37	38	39	40
41	42	43	44	45	46	47	48	49	50
51	52	53	54	55	56	57	58	59	60
61	62	63	64	65	66	67	68	69	70
71	72	73	74	75	76	77	78	79	80
81	82	83	84	85	86	87	88	89	90
91	92	93	94	95	96	97	98	99	100

#4

1	2	3	4	5	6	7	8	9	10
11	12	13	14	15	16	17	18	19	20
21	22	23	24	25	26	27	28	29	30
31	32	33	34	35	36	37	38	39	40
41	42	43	44	45	46	47	48	49	50
51	52	53	54	55	56	57	58	59	60
61	62	63	64	65	66	67	68	69	70
71	72	73	74	75	76	77	78	79	80
81	82	83	84	85	86	87	88	89	90
91	92	93	94	95	96	97	98	99	100


40 GAMES!

GAME #1
BUILD A SOCCER FIELD

My Soccer Field

12-5

With you must have 10 items in your soccer field.



GAME #2
BUILD A FOOTBALL FIELD

My Football Field

2+7=

With you must have 10 items in your football field.




GAME #3
BUILD A BASEBALL FIELD

My Baseball Field

6+9

With you must have 10 items in your baseball field.

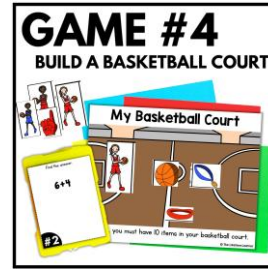


GAME #4
BUILD A BASKETBALL COURT

My Basketball Court

10-10

With you must have 10 items in your basketball court.




GAME #5
BUILD A VOLLEYBALL COURT

My Volleyball Court

19-10

With you must have 10 items in your volleyball court.

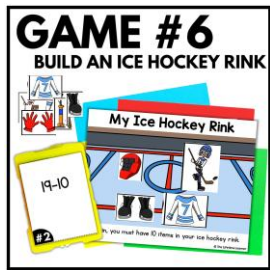


GAME #6
BUILD AN ICE HOCKEY RINK

My Ice Hockey Rink

10-3=

With you must have 10 items in your ice hockey rink.



GAME #7
BUILD A TRANSPORTATION SCENE

Transportation Around the World

15-9 = 6

With you must have 10 items in your transportation scene.




GAME #8
BUILD AN AQUARIUM

My Aquarium

10-1

With you must have 10 fish in your aquarium.



GAME #9
BUILD A PET SHOP

My Pet Shop

20-10

With you must have 10 items in your pet shop.



GAME #10
BUILD A DOG PARK

My Dog Park

46+10

With you must have 10 items in your dog park.



GAME #11
BUILD A CARNIVAL

Build a Carnival

3+3=7

With you must have 10 items in your carnival.




GAME #12
BUILD A CASTLE SCENE

My Castle

2+0=2

With you must have 10 items in your castle scene.



GAME #13
BUILD A COMIC

My Comic

6+7=13

With you must have 10 items in your comic scene.




GAME #14
BUILD A DINOSAUR SCENE

My Dinosaur Scene

7-3=4

With you must have 10 items in your dinosaur scene.




GAME #15
BUILD A ROBOT

My Robot

9+2=11

With you must have 10 items in your robot scene.




GAME #16
BUILD A PIRATE ISLAND

My Pirate Island

3+9=

With you must have 10 items in your pirate island.



GAME #17
BUILD A SPACE SCENE

My Space Scene

7-3=4

With you must have 10 items in your space scene.



GAME #18
BUILD A THEME PARK

My Theme Park

True or False?

With you must have 10 items in your theme park.




GAME #19
BUILD A TREASURE MAP

My Treasure Map

7-3=4

With you must have 10 items in your treasure map.




GAME #20
BUILD AN OCEAN SCENE










My Ocean Scene

7-3=4

With you must have 10 items in your ocean scene.

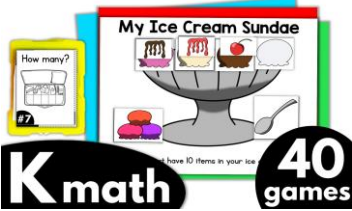


40 GAMES!



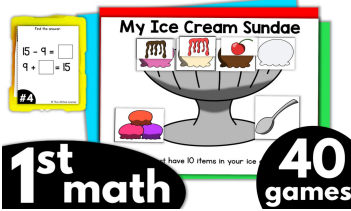
MORE BUILD IT GAMES:

BUILD IT GAMES



K math 40 games

BUILD IT GAMES



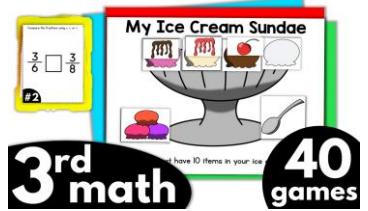
1st math 40 games

BUILD IT GAMES



2nd math 40 games

BUILD IT GAMES



3rd math 40 games

BUILD IT GAMES



4th math 40 games

BUILD IT GAMES



5th math 40 games

BUILD IT GAMES



K-1 phonics 40 games

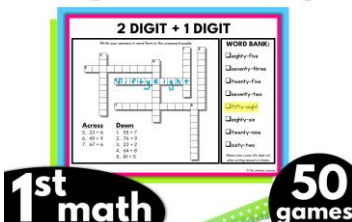
BUILD IT GAMES



reading & grammar 40 games

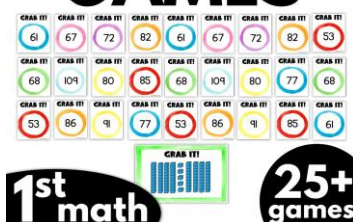
YOU MAY ALSO LIKE:

CROSSWORD PUZZLES



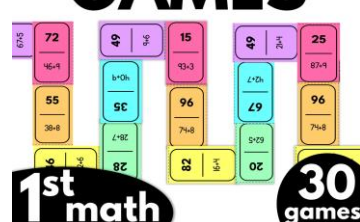
1st math 50 games

GRAB IT GAMES




1st math 25 games

DOMINO GAMES



1st math 30 games

PLAYING CARDS



1st math 30 games