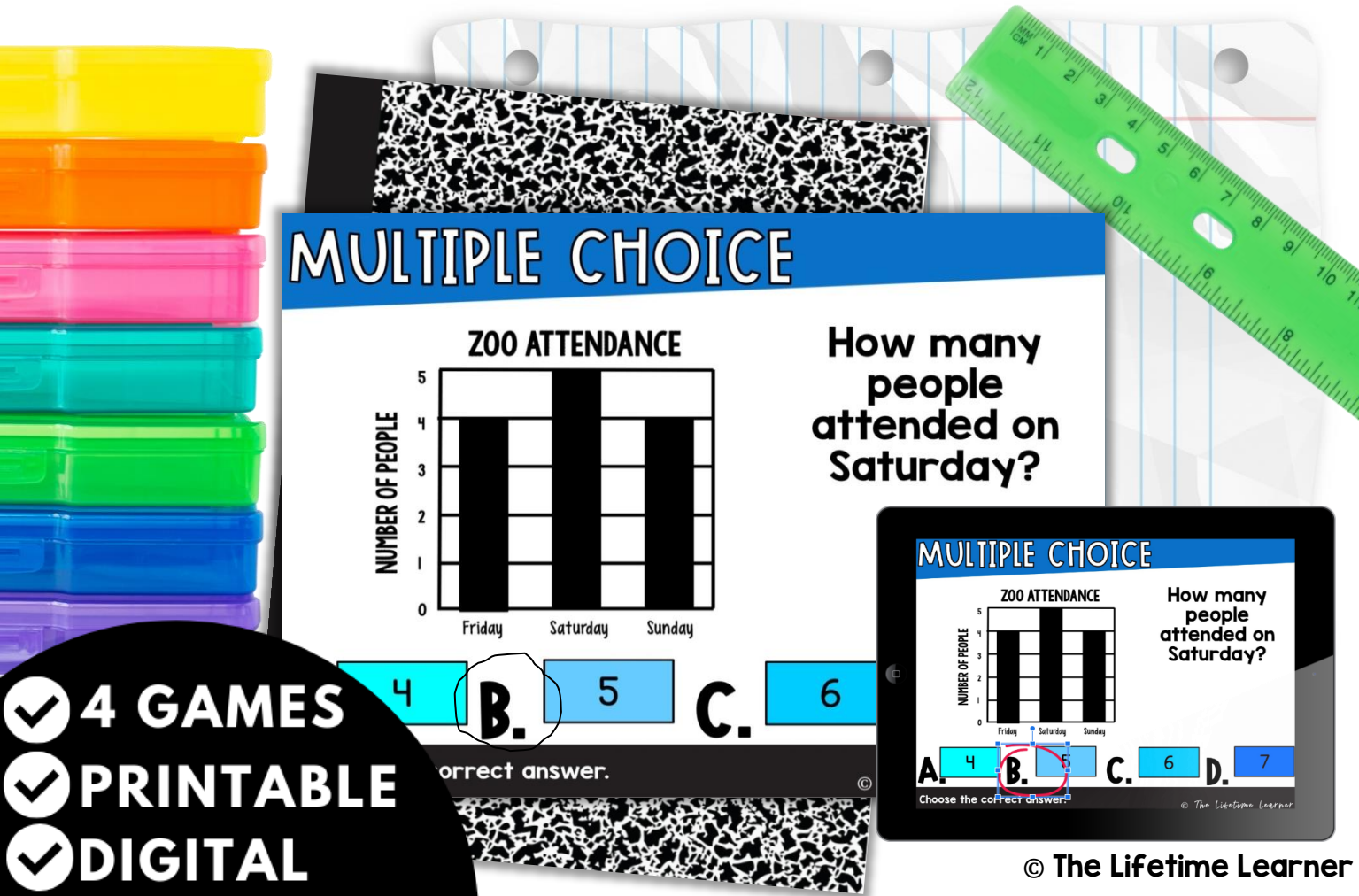


GRAPHING

1ST GRADE MATH



MULTIPLE CHOICE

ZOO ATTENDANCE

How many people attended on Saturday?

Day	Number of People
Friday	4
Saturday	5
Sunday	4

A. 4 B. 5 C. 6

Correct answer.

MULTIPLE CHOICE

ZOO ATTENDANCE

How many people attended on Saturday?

Day	Number of People
Friday	4
Saturday	5
Sunday	4

A. 4 B. 5 C. 6 D. 7

Choose the correct answer.

© The Lifetime Learner

✓ 4 GAMES
✓ PRINTABLE
✓ DIGITAL

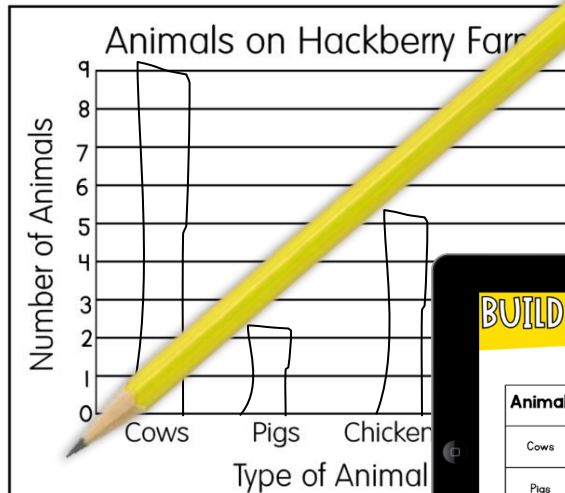
Get an **up close look**
at both versions
(**print and digital**)
on the next
few pages!

GAME #1

1.MD.4

BUILD THE BAR GRAPH

Animal	Number
Cows	9
Pigs	2
Chickens	5

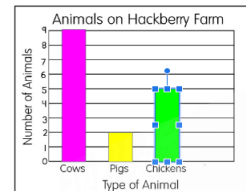


Draw the bar graph to show the data in the chart.

© The Life

BUILD THE BAR GRAPH

Animal	Number
Cows	9
Pigs	2
Chickens	5



Drag the blocks to show the data in the chart.

© The Life




Students fill in each graph to show the data in the chart.

GAME #2

1.MD.4

CREATE A QUESTION

NUMBER OF PEOPLE IN FAMILIES

Johnson Family	
Weeks Family	
Page Family	

Question:

How many people are in the Page family?

Answer:




3

Look at the graph. Write a **question** in the first box.
Write the **answer** in the second box.

© The Lifetime Learner

CREATE A QUESTION

NUMBER OF PEOPLE IN FAMILIES

Johnson Family	
Weeks Family	
Page Family	

Question:

How many people are in the Weeks and Johnson family combined?

Answer:

3 people

Look at the graph. Type a **question** in the yellow box.
Type the **answer** in the blue box.

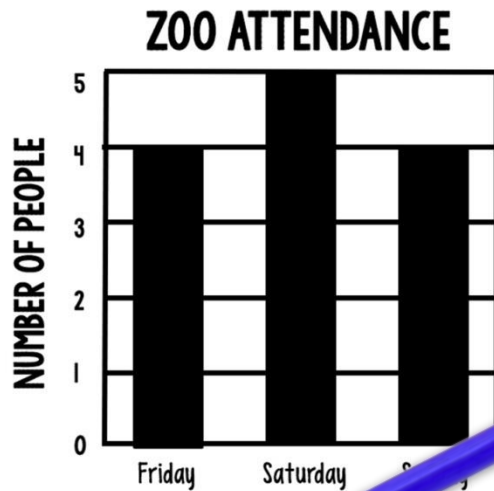
© The Lifetime Learner

Students create a question in the first box. Then, they write the answer in the second box.

GAME #3

1.MD.4

MULTIPLE CHOICE



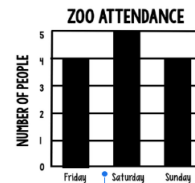
How many people attended on Saturday?

- A. 4 B. 5 C. 6

Choose the correct answer.

© The

MULTIPLE CHOICE



How many people attended on Saturday?

- A. 4 B. 5 C. 6 D. 7

Choose the correct answer.

© The Lifetime Learner

Students circle the correct answer.

GAME #4

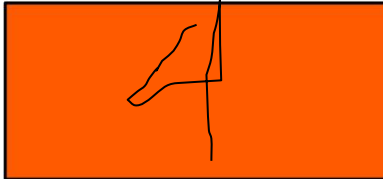
1.MD.4

WRITE IT IN



Car Accidents By Month	
May	4
June	8
July	9

How many car accidents were in May?



How many car accidents were in June?






Write the answer in the box provided.

© The

TYPE IT IN

T-Shirt Orders

Blue	
Red	
Green	

How many red and green t-shirts were ordered in all?

10

How many blue t-shirts were ordered?

4

Type the answer in the box provided.

© The Lifesize Learner

Students write the answers in the orange boxes.

RECORDING SHEETS

FOR ALL 4 GAMES

Write It In: Recording Sheet

1. 4	2.	3.	4.
8			
5.	6.	7.	8.
9.	10.	11.	

Put the 2 answers in each box.

© The Lifetime Learner

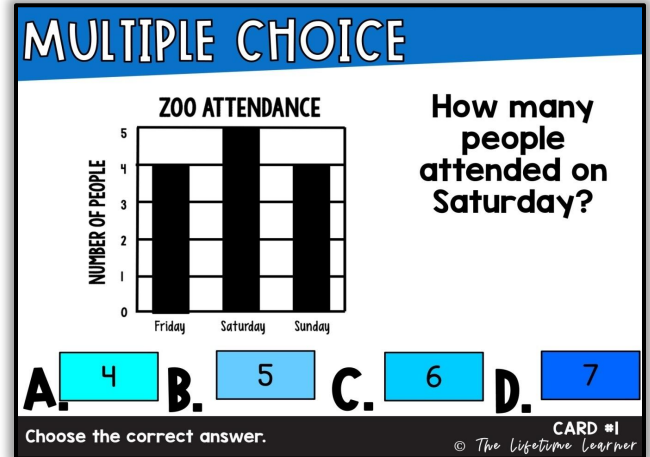
Students can easily record answers.

SIMPLE TO USE

Multiple Choice: Recording Sheet			
1.	2.	3.	4.
5.	6.	7.	8.
9.	10.	11.	

Write the correct answer in each box.

© The Lifetime Learner



Multiple Choice: Answer Key			
1. A	2. D	3. A	4. D
5. D	6. C	7. A	8. B
9. D	10. D	11. A	

Write the correct answer in each box.

© The Lifetime Learner

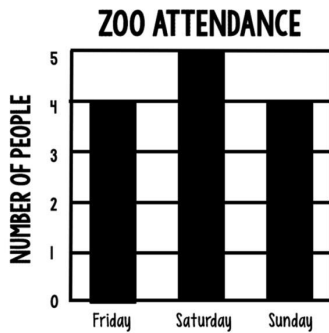
- 11 Task Cards per game
- Recording Sheets
- Answer Keys
- Color Versions
- Black and White Versions
- Digital Versions

All 4 printable games come with 11 labeled cards, a recording sheet, and answer key.

2 VERSIONS

OF EVERY PRINTABLE GAME

MULTIPLE CHOICE



How many people attended on Saturday?

- A. 4 B. 5 C. 6 D. 7

Choose the correct answer.

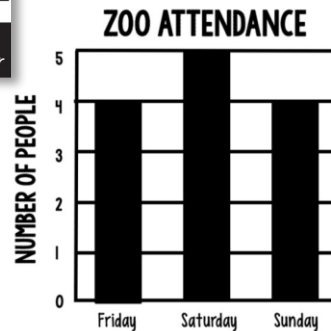
CARD #1

© The Lifetime Learner

COLOR

B&W

MULTIPLE CHOICE



How many people attended on Saturday?

- A. 4 B. 5 C. 6 D. 7

Choose the correct answer.

CARD #1

© The Lifetime Learner

Each game comes with 2 versions so you can pick the version that works best for your classroom!

WHY BUY?

- ✓ **fun and engaging**
- ✓ **aligned to common core**
- ✓ **easy to use format**
- ✓ **Print (B&W/color)**
- ✓ **Digital (Google Slides™)**
- ✓ **no prep**
- ✓ **40+ slides**
- ✓ **40+ task cards**

Buy the Bundle and Save Big!

1ST GRADE MATH: THE BUNDLE

LEAP FROG CARD #1
tens ones
 $49 \div 7 = 5$ A. 4 B. 5 C. 6

MULTIPLE CHOICE
ZOO ATTENDANCE
NUMBER OF PEOPLE
Friday Saturday Sunday
How many people attended on Saturday?

PLACE VALUE ADDITION
 $12 + 50 = 62$
Find the answer.

YES OR NO?
Is the shape split correctly into 2 equal parts?
No

GEOMETRY PUZZLERS
HOW TALL?
Answer: 4

WHICH FITS?
 $5 \div 3 = 8$

BUILD IT!
 $3 + \underline{\quad} = 15$

SOLVE THE PROBLEM
The farmer plants 5 fields of corn, 9 fields of fields of potatoes. How many fields did he plant?
A. 18 B. 19 C. 20 D. 21

DIGITAL
PRINTABLE
88 GAMES

© The Lifetime Learner