

# COUNTING TO 120

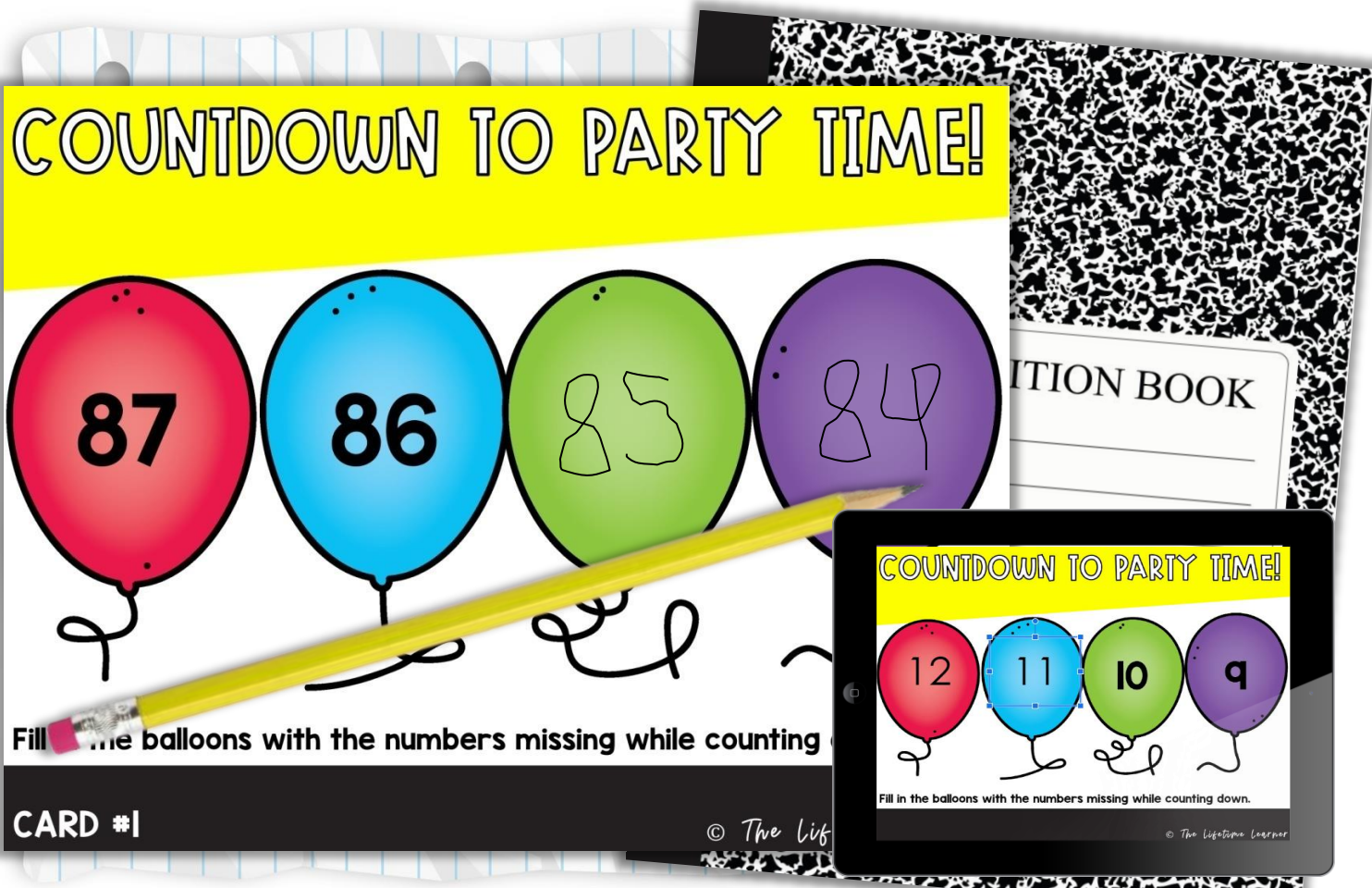
## 1ST GRADE MATH



Get an **up close look**  
at both versions  
(**print and digital**)  
on the next  
few pages!

# GAME #1

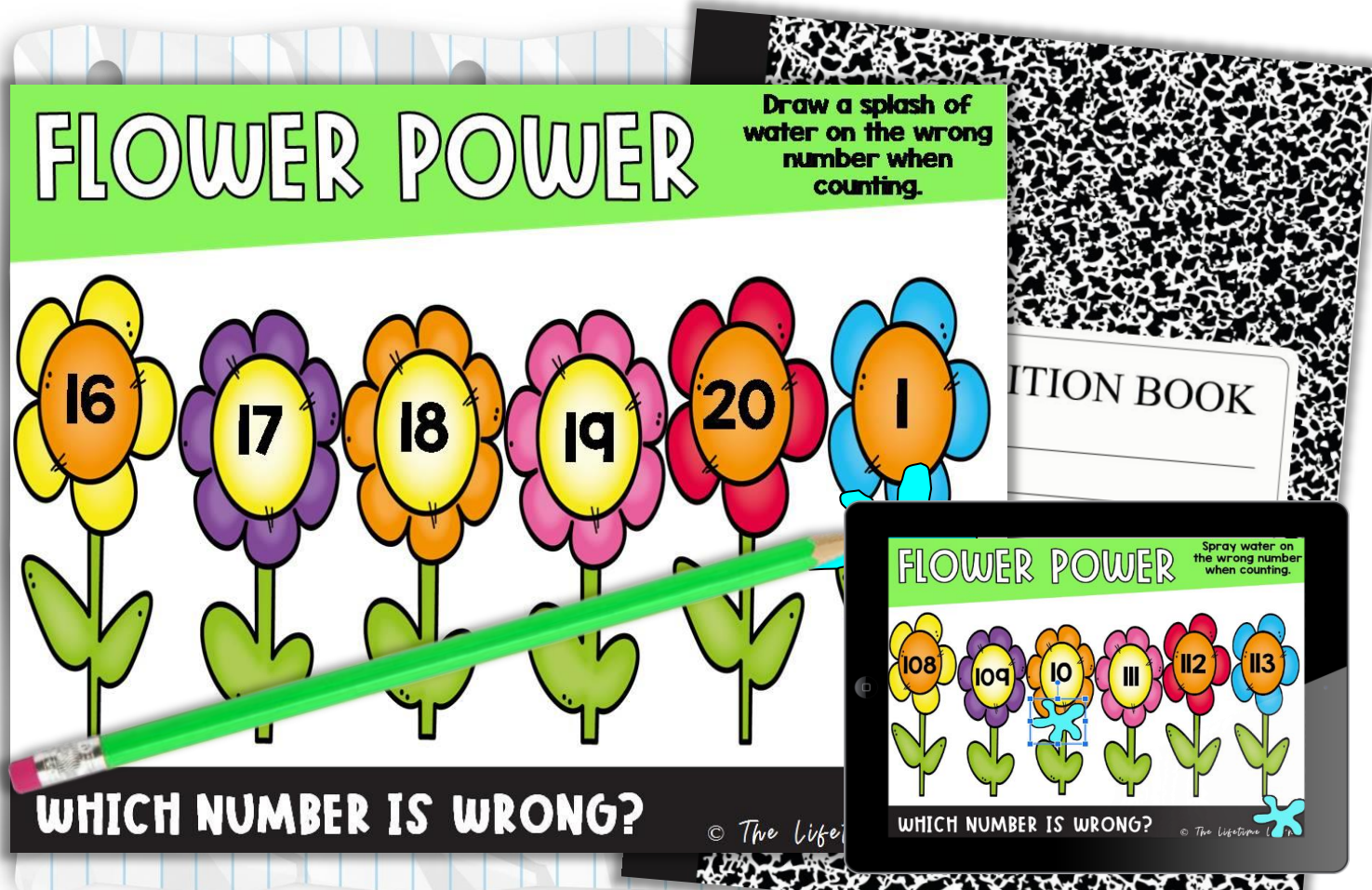
## 1.NBT.1



Students fill in the balloons with the numbers missing while counting down.

# GAME #2

## 1.NBT.1



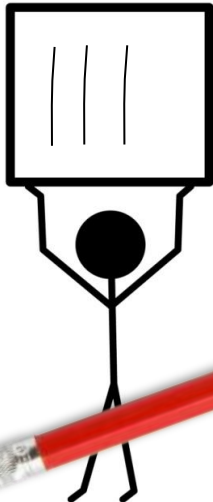
Students draw a splash of water on the wrong number in the counting sequence.



# GAME #3

## 1.NBT.1

### HELP THE PEOPLE



112



Fill in the numbers that come before and after the given number.

CARD #1

© The LifeSaver Learner

ATION BOOK

### HELP THE PEOPLE



112



Fill in the numbers that come before and after the given number.

© The LifeSaver Learner

Students fill in the 2 numbers that come before and after the number given.

# GAME #4

## 1.NBT.1

### WRITE IT!

CARD #1

I	2	3	4	5	6	7	8	9	10
11	12	13	14	15	16	17	18	19	20
21	22	23	24	25	26	27	28	29	30
31	32	33	34	35	36	37	38	39	40
41	42	43	44	45	46	47	48	49	50
51	52	53	54	55	56	57	58	59	60
61	62	63	64	65	66	67	68	69	70
71	72	73	74	75	76	77	78	79	80
81	82	83	84	85	86	87	88	89	90
91	92	93	94	95	96	97	98	99	100

Fill in the missing numbers.

© The Lifeline

### DRAG IT

1	2	3	4	5	6	7	8	9	10
11	12	13	14	15	16	17	18	19	20
21	22	23	24	25	26	27	28	29	30
31	32	33	34	35	36	37	38	39	40
41	42	43	44	45	46	47	48	49	50
51	52	53	54	55	56	57	58	59	60
61	62	63	64	65	66	67	68	69	70
71	72	73	74	75	76	77	78	79	80
81	82	83	84	85	86	87	88	89	90
91	92	93	94	95	96	97	98	99	100

Drag the digits over to fill in the missing numbers.

© The Lifeline

Students fill in the missing numbers  
in the orange boxes.

# RECORDING SHEETS

## FOR ALL 4 GAMES

### Write It: Recording Sheet

1. 18 33 68			2.			3.			4.		
5.			6.			7.			8.		
9.			10.			11.					

Write all of the missing numbers in each box.

© The Lifetime Learner

Students can easily record answers.

# SIMPLE TO USE

**Multiple Choice: Recording Sheet**

1.	2.	3.	4.
5.	6.	7.	8.
9.	10.	11.	

Write the correct answer in each box.

© The Lifetime Learner

**WRITE IT!** CARD #2

1	2	3	4	5	6	7	8	9	10
11	12	13	14		16	17	18	19	20
21	22	23	24	25	26	27	28	29	30
31	32	33	34	35	36	37	38	39	40
41	42	43	44	45	46	47	48	49	50
51	52	53	54	55	56	57	58	59	60
61	62	63	64	65	66	67	68	69	70
	72	73	74	75	76	77	78	79	80
81	82	83	84	85	86	87	88	89	90
91	92	93	94	95	96	97	98		100

Fill in the missing numbers.

© The Lifetime Learner

**Multiple Choice: Answer Key**

1. A	2. D	3. A	4. D
5. D	6. C	7. A	8. B
9. D	10. D	11. A	

Write the correct answer in each box.

© The Lifetime Learner

- 11 Task Cards per game
- Recording Sheets
- Answer Keys
- Color Versions
- Black and White Versions
- Digital Versions

All 4 printable games come with 11 labeled cards, a recording sheet, and answer key.



# 2 VERSIONS

## OF EVERY PRINTABLE GAME

**WRITE IT!**

CARD #2

1	2	3	4	5	6	7	8	9	10
11	12	13	14		16	17	18	19	20
21	22	23	24	25	26	27	28	29	30
31	32	33	34	35	36	37	38	39	40
41	42	43	44	45	46	47	48	49	50
51	52	53	54	55	56	57	58	59	60
61	62	63	64	65	66	67	68	69	70
	72	73	74	75	76	77	78	79	80
81	82	83	84	85	86	87	88	89	90
91	92	93	94	95	96	97	98		100

Fill in the missing numbers.

© The Lifetime Learner

**COLOR**

**B&W**

**RITE IT!**

CARD #2

2	3	4	5	6	7	8	9	10
12	13	14		16	17	18	19	20
21	22	23	24	25	26	27	28	29
31	32	33	34	35	36	37	38	39
41	42	43	44	45	46	47	48	49
51	52	53	54	55	56	57	58	59
61	62	63	64	65	66	67	68	69
	72	73	74	75	76	77	78	79
81	82	83	84	85	86	87	88	89
91	92	93	94	95	96	97	98	

Fill in the missing numbers.

© The Lifetime Learner

Each game comes with 2 versions so you can pick the version that works best for your classroom!

# WHY BUY?

- ✓ **fun and engaging**
- ✓ **aligned to common core**
- ✓ **easy to use format**
- ✓ **Print (B&W/color)**
- ✓ **Digital (Google Slides™)**
- ✓ **no prep**
- ✓ **40+ slides**
- ✓ **40+ task cards**

# Buy the Bundle and Save Big!

## 1ST GRADE MATH: THE BUNDLE

**LEAP FROG** CARD #1  
tens ones  
 $49 \div 7 = 5$  A. 4 B. 5 C. 6

**MULTIPLE CHOICE**  
ZOO ATTENDANCE  
NUMBER OF PEOPLE  
Friday Saturday Sunday  
How many people attended on Saturday?

**PLACE VALUE ADDITION**  
 $12 + 50 = 62$   
Find the answer.

**YES OR NO?**  
Is the shape split correctly into 2 equal parts?  
No

**GEOMETRY PUZZLERS**  
HOW TALL?  
Answer: 4

**WHICH FITS?**  
 $5 \div 3 = 8$

**BUILD IT!**  
 $3 + \underline{\quad} = 15$

**SOLVE THE PROBLEM**  
The farmer plants 5 fields of corn, 9 fields of fields of potatoes. How many fields did he plant?  
A. 18 B. 19 C. 20 D. 21

**DIGITAL**  
**PRINTABLE**  
**88 GAMES**

© The Lifetime Learner