




ADD 3 NUMBERS WORD PROBLEMS 1ST GRADE MATH



SOLVE THE PROBLEM

The farmer plants 5 fields of corn, 9 fields of beans, and 5 fields of potatoes. How many fields did he plant in all?

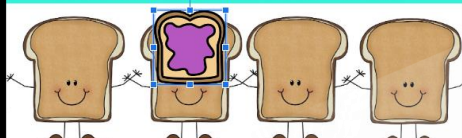


A. 18 B. 19 C. 20

Put the correct answer next to the peanut butter that has the correct answer.

SOLVE THE PROBLEM

The farmer plants 5 fields of corn, 9 fields of beans, and 5 fields of potatoes. How many fields did he plant in all?



A. 18 B. 19 C. 20 D. 21

Give the jelly to the peanut butter that has the correct answer.

© The Lifetime Learner

✓ 4 GAMES
✓ PRINTABLE
✓ DIGITAL

© The Lifetime Learner


Get an **up close look**
at both versions
(**print and digital**)
on the next
few pages!

GAME #1

1.OA.2

ICE CREAM ADDITION

Add the 3 numbers together.
Put your answer in the box.



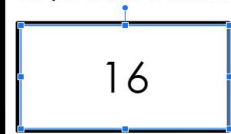
ITION BOOK

ADD 3 NUMBERS

© The Lifetime Learner

ICE CREAM ADDITION

Add the 3 numbers together.
Put your answer in the box.



ADD 3 NUMBERS

© The Lifetime Learner

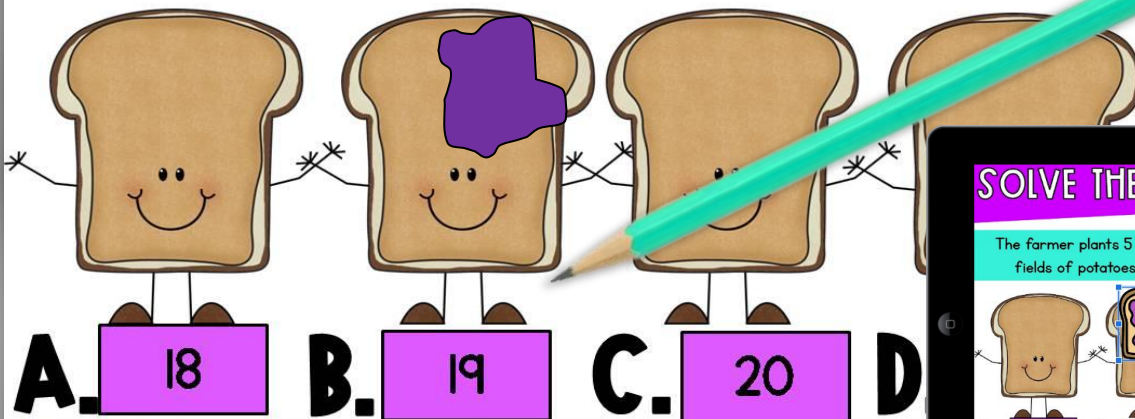
Students add the 3 numbers together and
write the answer in the box.

GAME #2

1.OA.2

SOLVE THE PROBLEM

The farmer plants 5 fields of corn, 9 fields of beans, and 5 fields of potatoes. How many fields did he plant in all?

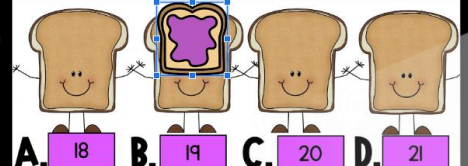


Draw jelly next to the peanut butter that has the correct answer.

© The LifeTime Learner

SOLVE THE PROBLEM

The farmer plants 5 fields of corn, 9 fields of beans, and 5 fields of potatoes. How many fields did he plant in all?



Give the jelly to the peanut butter that has the correct answer.

© The LifeTime Learner

Students draw jelly next to the peanut butter that has the correct answer.

GAME #3

1.OA.2

SNACK TIME CARD #1

I buy a muffin, a waffle, and an egg.
How much money did I spend?



Write the correct answer in each box.

© The LifeSpan Learner

SNACK TIME

I buy a muffin, a waffle, and an egg.
How much money did I spend?



Write the correct answer in each box.

© The LifeSpan Learner

Students write the total amount
of the foods the kid bought.

GAME #4

1.OA.2

SOLVE THE PROBLEM

Callie buys 7 donuts, 4 chocolates, and 3 cookies. How many desserts did she buy in all?

$$7 + 4 + 3 = 14$$

Solve the problem. Show your work.

CARD #1

© The L

SOLVE THE PROBLEM

Callie buys 7 donuts, 4 chocolates, and 3 cookies. How many desserts did she buy in all?

14

8	9	1	5
10	0	3	7
2	4	6	

Drag the answer over using the digits on the side.

© The Lifesize Learner

Students solve the given word problem.

RECORDING SHEETS

FOR ALL 4 GAMES

Solve the Problem: Recording Sheet

1. 14	2.	3.	4.
5.	6.	7.	8.
9.	10.	11.	

Write the answer in each box.

© The Lifetime Learner

Students can easily record answers.

SIMPLE TO USE

Multiple Choice: Recording Sheet			
1.	2.	3.	4.
5.	6.	7.	8.
9.	10.	11.	

Write the correct answer in each box.

© The Lifetime Learner

SOLVE THE PROBLEM

You pick 10 blueberries, 2 blackberries, and 3 raspberries.
How many berries do you have in all?

Solve the problem. Show your work.

CARD #2 © The Lifetime Learner

Multiple Choice: Answer Key			
1. A	2. D	3. A	4. D
5. D	6. C	7. A	8. B
9. D	10. D	11. A	

Write the correct answer in each box.

© The Lifetime Learner

- 11 Task Cards per game
- Recording Sheets
- Answer Keys
- Color Versions
- Black and White Versions
- Digital Versions

All 4 printable games come with 11 labeled cards, a recording sheet, and answer key.


2 VERSIONS

OF EVERY PRINTABLE GAME

SNACK TIME

CARD #2

I buy a muffin, cereal, and a waffle.
How much money did I spend?



Write the correct answer in each box.

© The Lifetime Learner


COLOR

B&W

SNACK TIME

CARD #2

I buy a muffin, cereal, and a waffle.
How much money did I spend?



Write the correct answer in each box.

© The Lifetime Learner

Each game comes with 2 versions so you can pick the version that works best for your classroom!

WHY BUY?

- ✓ **fun and engaging**
- ✓ **aligned to common core**
- ✓ **easy to use format**
- ✓ **Print (B&W/color)**
- ✓ **Digital (Google Slides™)**
- ✓ **no prep**
- ✓ **40+ slides**
- ✓ **40+ task cards**

Buy the Bundle and Save Big!

1ST GRADE MATH: THE BUNDLE

LEAP FROG CARD #1
tens ones
 $49 \div 7 = 5$ A. 4 B. 5 C. 6

MULTIPLE CHOICE
ZOO ATTENDANCE
NUMBER OF PEOPLE
Friday Saturday Sunday
How many people attended on Saturday?

PLACE VALUE ADDITION
 $12 + 50 = 62$
Find the answer.

YES OR NO?
Is the shape split correctly into 2 equal parts?
No

GEOMETRY PUZZLERS
HOW TALL?
Answer: 4

WHICH FITS?
 $5 \div 3 = 8$

BUILD IT!
 $3 + \underline{\quad} = 15$

SOLVE THE PROBLEM
The farmer plants 5 fields of corn, 9 fields of fields of potatoes. How many fields did he plant?
A. 18 B. 19 C. 20 D. 21

DIGITAL
PRINTABLE
88 GAMES

© The Lifetime Learner