

PROPERTIES OF ADDITION

1ST GRADE MATH

MAKE TEN TO SOLVE

$$3 + 7 + 8 =$$

$10 + 8 = 18$

numbers above to make ten. Write a new equation with the numbers above to make ten. Write a new equation with a ten.

© The Lifetime Learner

4 GAMES

PRINTABLE

DIGITAL

MAKE TEN TO SOLVE

$$3 + 7 + 8 =$$

$10 + 8 = 18$

Use the numbers above to make ten. Write a new equation with a ten.

© The Lifetime Learner

© The Lifetime Learner

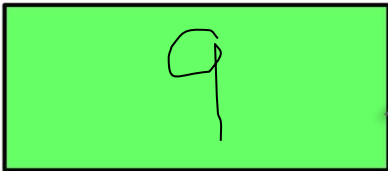
Get an **up close look**
at both versions
(print and digital)
on the next
few pages!

GAME #1

1.OA.3

FILL IN THE BOX

$$2 + 7 + 4 = 13$$



Fill in the box above with the answer to the 2 digits together.

CARD #1

© The Lifetime Learner

FILL IN THE BOX

$$2 + 7 + 4 = 13$$



$$+ 4 = 13$$

Fill in the green box above with the answer to the 2 digits added together.

© The Lifetime Learner

Students fill in the green box with the answer to the 2 digits added together.

GAME #2

1.OA.3

MAKE TEN TO SOLVE

$$3 + 7 + 8 =$$

$$10 + 8 = 18$$

Use the numbers above to make ten. Write a new equation

CARD #1

© The Life

MAKE TEN TO SOLVE

$$3 + 7 + 8 =$$

$$10 + 8 = 18$$

Use the numbers above to make ten. Write a new equation with a ten.

© The Life

Students write and solve a new equation that includes a 10.

GAME #3

1.OA.3

THE DOG ATE IT

$4 + 7 =$

$7 + 4 =$

ION BOOK

THE DOG ATE IT

$4 + 7 =$

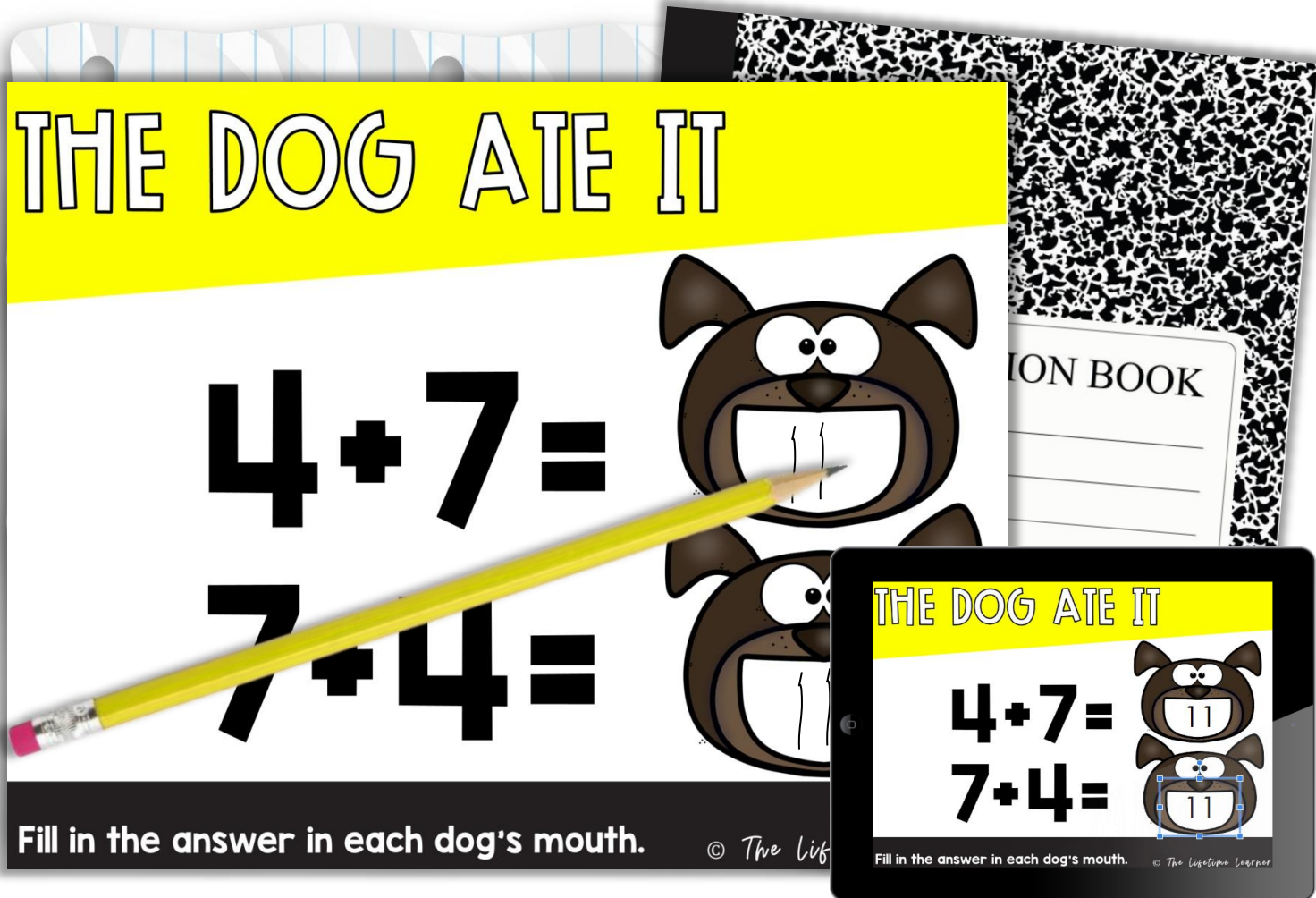
$7 + 4 =$

Fill in the answer in each dog's mouth.

© The Life

Fill in the answer in each dog's mouth.

© The Life




Students fill in the answer in each dog's mouth.

GAME #4

1.OA.3

THE MISSING NUMBER

$$3 + 7 = 7 + \underline{\quad}$$

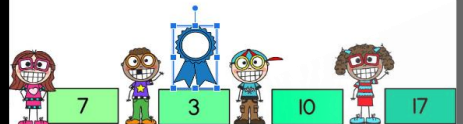


Which person has the missing number?
Draw them a ribbon.

© The Life

THE MISSING NUMBER

$$3 + 7 = 7 + \underline{\quad}$$



Which person has the missing number?
Give them the ribbon.

© The Life

Students draw a ribbon next to the kid
that has the correct answer.

RECORDING SHEETS

FOR ALL 4 GAMES

The Missing Number: Recording Sheet

| | | | |
|---------|-----|-----|----|
| 1. 3 | 2. | 3. | 4. |
| 5. | 6. | 7. | 8. |
| 9. | 10. | 11. | |

Write what the missing number is in each box.

© The Lifetime Learner

Students can easily record answers.

SIMPLE TO USE

Multiple Choice: Recording Sheet


| | | | |
|----|-----|-----|----|
| 1. | 2. | 3. | 4. |
| 5. | 6. | 7. | 8. |
| 9. | 10. | 11. | |

Write the correct answer in each box.

© The Lifetime Learner

THE MISSING NUMBER

$2 + 4 = 4 + _$



Which person has the missing number?
Give them the ribbon.

CARD #2

© The Lifetime Learner

Multiple Choice: Answer Key

| | | | |
|----------------|-----------------|-----------------|----------------|
| 1. A | 2. D | 3. A | 4. D |
| 5. D | 6. C | 7. A | 8. B |
| 9. D | 10. D | 11. A | |

Write the correct answer in each box.

© The Lifetime Learner

- 11 Task Cards per game
- Recording Sheets
- Answer Keys
- Color Versions
- Black and White Versions
- Digital Versions

All 4 printable games come with 11 labeled cards, a recording sheet, and answer key.

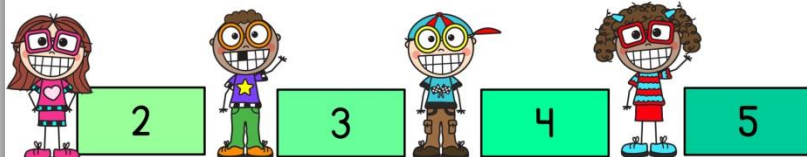
2 VERSIONS

OF EVERY PRINTABLE GAME

THE MISSING NUMBER

$$2 + 4 = 4 + \underline{\quad}$$

B&W



Which person has the missing number?
Give them the ribbon.


CARD #2

© The Lifetime Learner

COLOR

MISSING NUMBER

$$2 + 4 = 4 + \underline{\quad}$$



Which person has the missing number?
Give them the ribbon.

CARD #2

© The Lifetime Learner

Each game comes with 2 versions so you can pick the version that works best for your classroom!

WHY BUY?

- ✓ **fun and engaging**
- ✓ **aligned to common core**
- ✓ **easy to use format**
- ✓ **Print (B&W/color)**
- ✓ **Digital (Google Slides™)**
- ✓ **no prep**
- ✓ **40+ slides**
- ✓ **40+ task cards**

Buy the Bundle and Save Big!

1ST GRADE MATH: THE BUNDLE

