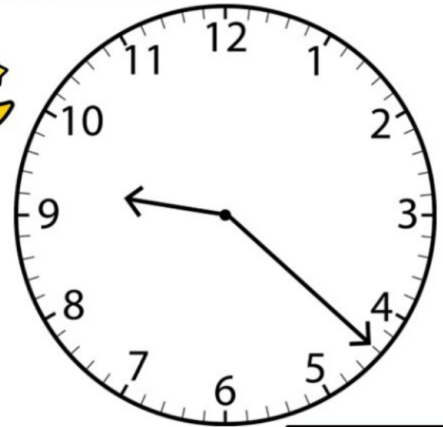



ELAPSED TIME


3RD GRADE MATH

TIME IN BETWEEN



How much time has passed between the first clock and the second clock? Write the answer in minutes in the box.

TIME IN BETWEEN



9:09

13 minutes

9:22

How much time has passed between the first clock and the second clock? Write the answer in minutes in the box.

© The Lifetime Learner

THE LIFETIME LEARNER

✓ 4 Activities

✓ Print & Digital

What's Included?

Everything you need for easy small-group or center rotations.

- ✓ 4 Task Card Games
- ✓ 11 Questions Per Game
- ✓ Recording Sheets
- ✓ Answer Keys
- ✓ Print & Digital
- ✓ Color & B/W Versions

GO BACK IN TIME

Jocelyn finishes her homework at 7:00pm.
If she started 16 minutes ago, what time did she begin?


Time	Hours/Minutes
	

Figure out the beginning time by using the t-chart provided.

CARD #1

© The Lifetime Learner

TIME TO GET UP!

I fell asleep at 5:02 AM. I woke up 25 minutes later. A.	I fell asleep at 5:02 AM. I woke up 33 minutes later. C.
I fell asleep at 5:02 AM. I woke up 23 minutes later. B.	I fell asleep at 5:02 AM. I woke up 35 minutes later. D.


The zebra woke up at 5:35 AM.

CARD #1

© The Lifetime Learner

Name: _____

Allowance: Recording Sheet

1.	2.	3.	4.
5.	6.	7.	8.
9.	10.	11.	

Write the letter of the correct answer in each box.

© The Lifetime Learner

ALLOWANCE

I swept the floor from 8:18 to 8:24 to earn some extra money. How long did I sweep the floor?




A.  6 min.	B.  7 min.	C.  8 min.	D.  9 min.
---	---	---	---

Choose the person with the correct answer.

CARD #1

© The Lifetime Learner

TIME IN BETWEEN

		
<input type="text"/>	<input type="text"/>	<input type="text"/>

How much time has passed between the first clock and the second clock? Write the answer in minutes in the box.

CARD #1

© The Lifetime Learner



Game #1

Allowance

Students figure out how many minutes each kid worked for extra allowance.

ALLOWANCE

I swept the floor from 8:18 to 8:24 to earn some extra money. How long did I sweep the floor?



Choose the person with the correct answer.

CARD #1

© The Lifetime Learner



Allowance: Answer Key


2.	C	3.	B	4.	B
5.	B	6.	D	7.	C
8.	B	9.	B	10.	D
11.	C				

Write the letter of the correct answer in each box.

© The Lifetime Learner

ALLOWANCE

I swept the floor from 8:18 to 8:24 to earn some extra money. How long did I sweep the floor?



Choose the person with the correct answer.

CARD #1


© The Lifetime Learner

Game #2

In Between

Students find the time on the two clocks. Then, they calculate the time in between the two.

TIME IN BETWEEN



How much time has passed between the first clock and the second clock? Write the answer in minutes in the box.

CARD #1

© The Lifetime Learner



How much time has passed between the first clock and the second clock? Write the answer in minutes in the box. © The Lifetime Learner


In Between: Answer Key

2. 45 minutes	3. 24 minutes	4. 33 minutes
5. 9 minutes	6. 6 minutes	7. 6 minutes
8. 6 minutes	9. 11 minutes	10. 28 minutes
11. 25 minutes		

Write the elapsed time in each box.

© The Lifetime Learner

TIME IN BETWEEN



How much time has passed between the first clock and the second clock? Write the answer in minutes in the box.

CARD #1

© The Lifetime Learner

Game #3

Time to Get Up!

Students cut and paste the animal in the correct grass field based on calculating the ending time.

TIME TO GET UP!



I fell asleep at 5:02 AM.
I woke up 25 minutes later.

A.

I fell asleep at 5:02 AM.
I woke up 33 minutes later.

C.

I fell asleep at 5:02 AM.
I woke up 23 minutes later.

B.

I fell asleep at 5:02 AM.
I woke up 35 minutes later.

D.

The zebra woke up at **5:35 AM.**

CARD #1

© The Lifetime Learner



TIME TO GET UP!



I fell asleep at 5:02 AM.
I woke up 25 minutes later.

A.

I fell asleep at 5:02 AM.
I woke up 33 minutes later.

C.

I fell asleep at 5:02 AM.
I woke up 23 minutes later.

B.

I fell asleep at 5:02 AM.
I woke up 35 minutes later.

D.

The zebra woke up at **5:35 AM.**

CARD #1

© The Lifetime Learner

Time to Get Up: Answer Sheet

2.	D	3.	A	4.	C
5.	C	6.	A	7.	B
8.	C	9.	A	10.	B
11.	D				

Write the letter of the correct answer choice in each box.

© The Lifetime Learner

Game #4

Go Back In Time

Students fill in the t-chart to find the elapsed time going backwards to solve each word problem.

GO BACK IN TIME

Jocelyn finishes her homework at 7:00pm.

If she started 16 minutes ago, what time did she begin?

Time	Hours/Minutes



Figure out the beginning time by using the t-chart provided.

CARD #1

© The Lifetime Learner

GO BACK IN TIME


Jocelyn finishes her homework at 7:00pm.
If she started 16 minutes ago, what time did she begin?

Time	Hours/Minutes
7:00	-10 min
6:50	-6 min
6:44	

Figure out the beginning time by using the t-chart provided.

© The Lifetime Learner

Back in Time: Answer Key

2. 5:33pm	3. 7:17am	4. 7:39pm
5. 6:59pm	6. 5:43pm	7. 3:14pm
8. 7:23pm	9. 4:18pm	10. 10:00am
11. 7:45pm		

Write the answer in each box.

© The Lifetime Learner

GO BACK IN TIME

Jocelyn finishes her homework at 7:00pm.

If she started 16 minutes ago, what time did she begin?

Time	Hours/Minutes



Figure out the beginning time by using the t-chart provided.

CARD #1

© The Lifetime Learner

Want more games like this?

Grab the bundle and save big.

3RD GRADE MATH TASK CARD BUNDLE

CATCH THE BUGS

$8 \div 4$

CATCH THE BUGS

$8 \div 4$

COLOR IT!

$2+2$

2×5 $2+2+2+2$

COLOR IT!

2×5 $2+2+2+2$

FIND THE ERROR

5,10,15,20,30,35

6×5

FIND THE ERROR

30,35

6×5

MAKE AN ARRAY

$3 \times 9 =$

MAKE AN ARRAY

$3 \times 9 =$

PLOTTING FRACTIONS GAMES

Write the fraction that belongs on top of each animal.

1.

2.

3.

4.

PLOTTING FRACTIONS GAMES

Write the fraction that belongs on top of each animal.

1.

2.

FLOWER POWER

Water the flowers that round to the hundred below.

209, 125, 234, 227, 246, 155

149, 151, 188, 172, 213

ROUND

ROUNDS TO 200

CARD #2

COMPLETE THE ACTIVITY

1. $\frac{2}{4} \times \frac{3}{8}$ 4. $\frac{1}{2} \times \frac{3}{4}$

2. $\frac{1}{4} \times \frac{3}{8}$

COMPLETE THE ACTIVITY

1. $\frac{2}{4} \times \frac{3}{8}$ 4. $\frac{1}{2} \times \frac{3}{4}$

FIND AN AREA OF...

32

A.

C.

B.

FIND AN AREA OF... 32

A.

C.

LUNCH TIME FUN

Uh oh! It looks like there's been a food mix-up! Give the correct Foods to the kid below based on your knowledge of equivalent fractions. Write the answer(s) above each tray.

$\frac{3}{4}$

CARD #2

LUNCH TIME FUN

Uh oh! It looks like there's been a food mix-up! Give the correct Foods to the kid below based on your knowledge of equivalent fractions. Write the answer(s) above each tray.

$\frac{3}{4}$

CARD #2

150+

PRINT & DIGITAL GAMES

