

# ROUNDING TO THE NEAREST 10 WITHIN 1,000

## 3RD GRADE MATH

Round to the Nearest 100

### RIGHT OR WRONG?

|                 |                 |                 |                 |
|-----------------|-----------------|-----------------|-----------------|
| 39 rounds to 0. | 78 rounds to 0. | 90 rounds to 0. | 24 rounds to 0. |
|-----------------|-----------------|-----------------|-----------------|

Put a check on the answers that are correct and an X on the answers that are wrong.

Round to the Nearest 100

### RIGHT OR WRONG?

|                    |                    |                    |                    |
|--------------------|--------------------|--------------------|--------------------|
| 182 rounds to 200. | 251 rounds to 200. | 222 rounds to 200. | 149 rounds to 200. |
|--------------------|--------------------|--------------------|--------------------|

Put a check on the answers that are correct and an X on the answers that are wrong.

- ✓ 4 Activities
- ✓ Print & Digital

# What's Included?

Everything you need for easy small-group or center rotations.

- ✓ 4 Task Card Games
- ✓ 11 Questions Per Game
- ✓ Recording Sheets
- ✓ Answer Keys
- ✓ Print & Digital
- ✓ Color & B/W Versions

### DOT IT, PLOT IT!

385 rounds to

Put a dot where each number falls on the number line. Then fill in the box which number it rounds to.

**ROUND TO THE NEAREST 10** CARD #1  
© The Lifetime Learner

### RIGHT OR WRONG?

Round to the Nearest 100

39 rounds to 0. 78 rounds to 0. 90 rounds to 0. 24 rounds to 0.

Put a check on the answers that are correct and an X on the answers that are wrong.

**CARD #1**  
© The Lifetime Learner

Name: \_\_\_\_\_

### Ice Cream Rounding: Recording Sheet

|    |     |     |    |
|----|-----|-----|----|
| 1. | 2.  | 3.  | 4. |
| 5. | 6.  | 7.  | 8. |
| 9. | 10. | 11. |    |

Write 3 numbers in each box that round to the number shown.

© The Lifetime Learner

### ICE CREAM ROUNDING

Write 3 numbers on the ice cream cone that round to the number shown below.

**ROUNDS TO 850** CARD #1  
© The Lifetime Learner

### CHOOSE A SIDE

682

Write the 2 tens the number falls between. Then, circle the ten the number rounds to.

**CARD #1**  
© The Lifetime Learner



# Game #1

# Choose a Side

Students write in the tens that come before and after the number. Then, they circle the number it rounds to.

**CHOOSE A SIDE**

Write the 2 tens the number falls between. Then, circle the ten the number rounds to.

CARD #1

© The Lifetime Learner

## Choose a Side: Answer Key

|     |     |     |
|-----|-----|-----|
| 2.  | 3.  | 4.  |
| 870 | 880 | 190 |
| 200 | 690 | 700 |
| 5.  | 6.  | 7.  |
| 420 | 430 | 310 |
| 320 | 750 | 760 |
| 460 | 470 | 8.  |
| 9.  | 10. | 11. |
| 290 | 300 | 510 |
| 520 | 140 | 150 |
|     |     |     |

Write the 2 tens the number falls between in the boxes. Circle the number it rounds to.

© The Lifetime Learner

**CHOOSE A SIDE**

Write the 2 tens the number falls between. Then, circle the ten the number rounds to.

CARD #1

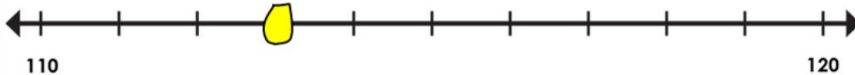
© The Lifetime Learner

# Game #2


# Dot It, Plot It!

Students plot the number on the number line. Then, they round to the nearest ten.

## DOT IT, PLOT IT!



113 rounds to

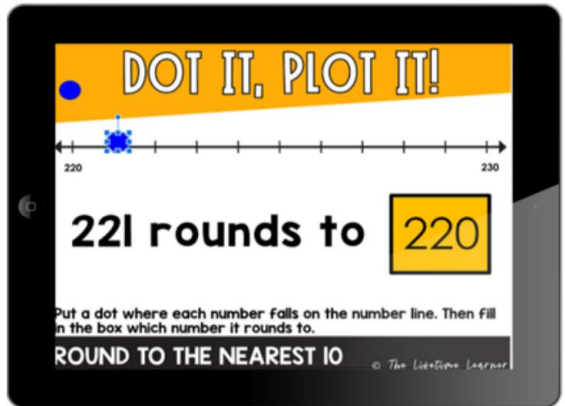


Put a dot where each number falls on the number line. Then fill in the box which number it rounds to.

**ROUND TO THE NEAREST 10**

**CARD #8**

© The Lifetime Learner



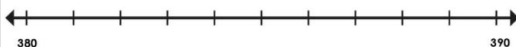
## Dot It, Plot It: Answer Key

|     |     |    |     |     |     |
|-----|-----|----|-----|-----|-----|
| 2.  | 220 | 3. | 640 | 4.  | 990 |
| 5.  | 160 | 6. | 460 | 7.  | 890 |
| 8.  | 110 | 9. | 570 | 10. | 700 |
| 11. | 740 |    |     |     |     |

Write what each number rounds to in each box.

© The Lifetime Learner

## DOT IT, PLOT IT!



385 rounds to



Put a dot where each number falls on the number line. Then fill in the box which number it rounds to.

**ROUND TO THE NEAREST 10**

**CARD #1**

© The Lifetime Learner

# Game #3

# Ice Cream Rounding

Students write 3 numbers that round to the given number on each ice cream scoop.

## ICE CREAM ROUNDING

Write 3 numbers on the ice cream cone that round to the number shown below.



**ROUNDS TO 850**

CARD #1

© The Lifetime Learner  
854

## ICE CREAM ROUNDING

Type 3 numbers on the ice cream cone that round to the number shown below.




**ROUNDS TO 620**

© The Lifetime Learner

## Ice Cream Rounding: Answer Key

Answers will vary


|    |                   |     |                   |     |   |
|----|-------------------|-----|-------------------|-----|---|
| 2. | 615<br>618<br>619 | 3.  | 865<br>866<br>871 | 4.  | 549<br>552<br>554   |
| 5. | 225<br>228<br>232 | 6.  | 991<br>992<br>993 | 7.  | 706<br>708<br>709   |
| 9. | 341<br>336<br>342 | 10. | 161<br>163<br>164 | 11. | 318<br>319<br>321   |
|    |                   |     |                   |     |  |

Write 3 numbers in each box that round to the number shown.

© The Lifetime Learner

## ICE CREAM ROUNDING

Write 3 numbers on the ice cream cone that round to the number shown below.



**ROUNDS TO 850**

CARD #1

© The Lifetime Learner

# Game #4

# Sort It

Students sort the numbers on the correct side while rounding to the nearest ten.

**SORT IT!** CARD #1

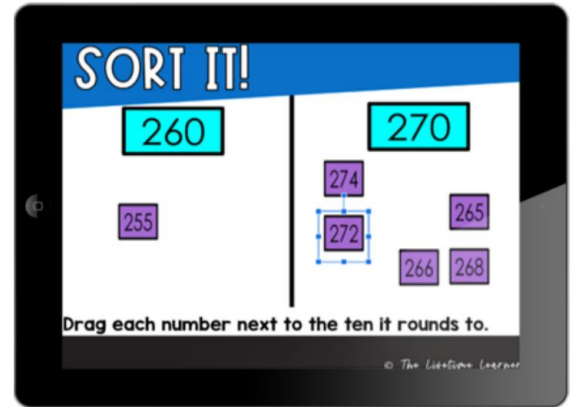
230                      240

---

Cut and paste each number under the ten it rounds to.

|     |     |     |
|-----|-----|-----|
| 234 | 228 | 244 |
| 242 | 229 | 225 |

© The Lifetime Learner



**SORT IT!** CARD #1

230                      240

---

Cut and paste each number under the ten it rounds to.

|     |     |     |
|-----|-----|-----|
| 234 | 228 | 244 |
| 242 | 229 | 225 |

© The Lifetime Learner

## Sort It: Answer Key

|        |     |         |     |         |     |
|--------|-----|---------|-----|---------|-----|
| 2. 300 | 310 | 3. 570  | 580 | 4. 710  | 720 |
| 297    | 311 | 569     | 575 | 707     | 719 |
| 303    | 305 |         | 577 | 714     | 718 |
| 295    | 308 |         | 582 | 712     | 716 |
| 227    |     |         | 583 |         |     |
| 225    |     |         | 581 |         |     |
| 5. 940 | 950 | 6. 260  | 270 | 7. 490  | 500 |
| 943    | 952 | 255     | 274 | 488     | 495 |
| 937    | 954 |         | 265 | 493     | 497 |
| 941    |     |         | 272 |         | 502 |
| 944    |     |         | 268 |         | 499 |
|        |     |         | 266 |         |     |
| 9.     | 850 | 10. 680 | 690 | 11. 140 | 150 |
| 848    | 858 | 677     | 691 | 144     | 146 |
| 852    | 862 | 678     | 693 | 142     | 147 |
| 854    | 856 | 679     | 692 | 143     | 145 |
|        |     |         |     |         |     |

Write the numbers that go under each ten.

# Want more games like this?

## Grab the bundle and save big.

# 3RD GRADE MATH TASK CARD BUNDLE

### CATCH THE BUGS

$8 \div 4$

CATCH THE BUGS

$8 \div 4$

### COLOR IT!

$2+2$

$2 \times 5$   $2+2+2+2$

COLOR IT!

$2 \times 5$   $2+2+2+2$

### FIND THE ERROR

5,10,15,20,30,35

$6 \times 5$

### FIND THE ERROR

30,35

$6 \times 5$

### MAKE AN ARRAY

$3 \times 9 =$

MAKE AN ARRAY

$3 \times 9 =$

### PLOTTING FRACTIONS GAMES

Write the fraction that belongs on top of each animal.

1.

2.

3.

4.

PLOTTING FRACTIONS GAMES

Write the fraction that belongs on top of each animal.

1.

2.

### FLOWER POWER

Water the flowers that round to the hundred below.

209, 125, 234, 227, 246, 155

149, 151, 188, 172, 213

ROUND

ROUNDS TO 200

CARD #2

### COMPLETE THE ACTIVITY

1.  $\frac{2}{4} \times \frac{3}{8}$

2.  $\frac{1}{2} \times \frac{3}{4}$

3.  $\frac{1}{2} \times \frac{3}{8}$

4.  $\frac{1}{2} \times \frac{3}{4}$

COMPLETE THE ACTIVITY

1.  $\frac{2}{4} \times \frac{3}{8}$

4.  $\frac{1}{2} \times \frac{3}{4}$

### FIND AN AREA OF...

32

A.

B.

C.

FIND AN AREA OF... 32

A.

B.

C.

### LUNCH TIME FUN

Uh oh! It looks like there's been a food mix-up! Give the correct Foods to the kid below based on your knowledge of equivalent fractions. Write the answer(s) above each tray.

$\frac{3}{4}$

CARD #2

LUNCH TIME FUN

Uh oh! It looks like there's been a food mix-up! Give the correct Foods to the kid below based on your knowledge of equivalent fractions. Write the answer(s) above each tray.

$\frac{3}{4}$

CARD #2

# 150+

# PRINT & DIGITAL GAMES

