

# ROUNDING TO THE NEAREST 100

## 3RD GRADE MATH

FEED ME! FEED ME!

100




Write which numbers belong

ROUND TO NEAREST 100

FEED ME! FEED ME!

500

400



Drag each food into the correct animal's mouth.

ROUND TO NEAREST 100

© The Lifetime Learner

THE LIFETIME LEARNER

✓ 4 Activities

✓ Print & Digital

# What's Included?

Everything you need for easy small-group or center rotations.

- ✓ 4 Task Card Games
- ✓ 11 Questions Per Game
- ✓ Recording Sheets
- ✓ Answer Keys
- ✓ Print & Digital
- ✓ Color & B/W Versions

**PARTY TIME**

Fill in the four balloons with numbers that round to each hundred.  
Write 2 numbers that round UP and 2 numbers that round DOWN.

**ROUNDS TO 300** CARD #1  
© The Lifesize Learner

**FLOWER POWER**

Water the flowers that round to the hundred below.

**ROUNDS TO 400** CARD #1  
© The Lifesize Learner

Name: \_\_\_\_\_

**Feed Me, Feed Me: Recording Sheet**

1. Dog Cat	2. Snake Duck	3. Squirrel Rabbit	4. Penguin Bear
5. Deer Owl	6. Pig Eagle	7. Sheep Horse	8. Cow Teacher
9. Lizard Monkey	10. Gorilla Zebra	11. Alligator Lion	

Write which numbers belong to each animal by rounding.  
Some numbers do not belong to either animal.

© The Lifesize Learner

**FEED ME! FEED ME!**

Write which numbers belong in each animal's mouth.

**ROUND TO NEAREST 100** CARD #1  
© The Lifesize Learner

**RIGHT OR WRONG?**

Put a check on the answers that are correct and an X on the answers that are wrong.

**CARD #1**  
© The Lifesize Learner



# Game #1

# Feed Me, Feed Me

Students write which numbers belong in each animal's mouth by rounding to the nearest 100.

**FEED ME! FEED ME!** 100

Write which numbers belong in each animal's mouth.

**ROUND TO NEAREST 100**

**CARD #2**

© The Lifetime Learner

**FEED ME! FEED ME!** 400 500

Drag each food into the correct animal's mouth.  
**ROUND TO NEAREST 100**

© The Lifetime Learner

## Feed Me: Recording Sheet

2.	Snake 16, 23, 41	Duck 87, 55, 95	3.	Squirrel 255, 285, 345	Rabbit 385	4.	Penguin 740, 690, 670, 710	Bear 770, 810
5.	Deer 222	Owl 333	6.	Pig 871, 893, 945	Eagle 954	7.	Sheep 510, 489, 502	Horse 550
8.	Cow 623, 594	Rooster 718, 657	9.	Leopard 123	Monkey 223, 234	10.	Giraffe 771, 831	Zebra 941, 881, 901
11.	Alligator 650, 749	Lion 849, 750						

Write which numbers belong to each animal.  
Some numbers do not belong to either animal.

© The Lifetime Learner

**FEED ME! FEED ME!** 100

Write which numbers belong in each animal's mouth.

**ROUND TO NEAREST 100**

**CARD #2**

© The Lifetime Learner

# Game #2

# Flower Power

Students identify all flowers that round to the nearest 100 in each flower patch.

**FLOWER POWER**

Water the flowers that round to the hundred below.

**ROUNDS TO 200**

CARD #2  
© The Lifetime Learner

**FLOWER POWER**

Water the flowers that round to the hundred below.

**ROUNDS TO 400**

© The Lifetime Learner

**FLOWER POWER**

Water the flowers that round to the hundred below.

**ROUNDS TO 200**

CARD #2  
© The Lifetime Learner

## Flower Power: Answer Key

2. Find 8. 209 234 227 155 151 188 172 213 424 417	3. Find 10. 777 823 841 791 764 805 833 792 780 818	4. Find 7. 107 50 86 63 70 92 127
5. Find 9. 521 473 530 498 485 542 465 451 519	6. Find 9. 677 686 705 749 666 735 710 653 699	7. Find 7. 960 981 999 956 969 970 1005
9. Find 6. 39 25 5 13 49 28	10. Find 5. 556 593 577 643 581	11. Find 10. 872 888 906 926 850 861 935 911 894 949


Write the numbers that DO round to each hundred in each box. There is a hint at the top of each box how many numbers you will need to write.

# Game #3

# Party Time

Students fill in the four balloons with numbers that round to the nearest hundred.

## PARTY TIME



Fill in the four balloons with numbers that round to each hundred.  
Write 2 numbers that round UP and 2 numbers that round DOWN.

**ROUNDS TO 300**

CARD #1

© The Lifetime Learner  
312



## Party Time: Answer Key


Answers will vary

2.	777 797 815 842	3.	12 48 33 25	4.	88 69 123 141		
5.	384 376 420 435	6.	899 867 933 908	7.	454 480 523 537	8.	662 685 704 730
9.	155 178 210 222	10.	550 581 619 643	11.	974 981 999 950		

Write four numbers in each box that round to the number given.  
Write 2 numbers that round UP and 2 numbers that round DOWN.

© The Lifetime Learner

## PARTY TIME



Fill in the four balloons with numbers that round to each hundred.  
Write 2 numbers that round UP and 2 numbers that round DOWN.

**ROUNDS TO 300**

CARD #1

© The Lifetime Learner

# Game #4

# Right or Wrong?

Students decide which unicorns on each task card rounded correctly. They record those answers.

Round to the Nearest 100

## RIGHT OR WRONG?

39 rounds to 0.

78 rounds to 0.

90 rounds to 0.

24 rounds to 0.






Put a check on the answers that are correct and an X on the answers that are wrong.

**CARD #1**  
© The Lifetime Learner

Round to the Nearest 100





## RIGHT OR WRONG?

182 rounds to 200.

251 rounds to 200.

222 rounds to 200.


149 rounds to 200.

Put a check on the answers that are correct and an X on the answers that are wrong.

© The Lifetime Learner

## Right or Wrong: Answer Key

2.	1, 3	3.	2, 3, 4	4.	1, 2, 3, 4
5.	No correct answer	6.	2, 3	7.	1, 2
8.	3, 4	9.	1, 4	10.	2, 3, 4
11.	4				

Write the unicorns that are correct in each box.

© The Lifetime Learner

Round to the Nearest 100





## RIGHT OR WRONG?

39 rounds to 0.

78 rounds to 0.

90 rounds to 0.

24 rounds to 0.

Put a check on the answers that are correct and an X on the answers that are wrong.

**CARD #1**  
© The Lifetime Learner

# Want more games like this?

## Grab the bundle and save big.

# 3RD GRADE MATH TASK CARD BUNDLE

### CATCH THE BUGS

$8 \div 4$

CATCH THE BUGS

$8 \div 4$

### COLOR IT!

$2+2$

$2 \times 5$   $2+2+2+2$

COLOR IT!

$2 \times 5$   $2+2+2+2$

Find the repeated

### FIND THE ERROR

5,10,15,20,30,35

$6 \times 5$

### FIND THE ERROR

5,10,15,20,30,35

$6 \times 5$

### MAKE AN ARRAY

$3 \times 9 =$

MAKE AN ARRAY

$3 \times 9 =$

### PLOTTING FRACTIONS GAMES

Write the fraction that belongs on top of each animal.

1.

2.

3.

4.

PLOTTING FRACTIONS GAMES

Write the fraction that belongs on top of each animal.

1.

2.

### FLOWER POWER

Water the flowers that round to the hundred below.

209, 125, 234, 227, 246, 155

149, 151, 188, 172, 213

ROUND

ROUNDS TO 200

CARD #2

### COMPLETE THE ACTIVITY

1.  $\frac{2}{4} \times \frac{3}{8}$

2.  $\frac{1}{2} \times \frac{3}{4}$

3.  $\frac{1}{2} \times \frac{3}{8}$

4.  $\frac{1}{2} \times \frac{3}{4}$

COMPLETE THE ACTIVITY

1.  $\frac{2}{4} \times \frac{3}{8}$

4.  $\frac{1}{2} \times \frac{3}{4}$

### FIND AN AREA OF...

32

A.

B.

C.

FIND AN AREA OF... 32

A.

B.

C.

### LUNCH TIME FUN

Uh oh! It looks like there's been a food mix-up! Give the correct Foods to the kid below based on your knowledge of equivalent fractions. Write the answer(s) above each tray.

$\frac{3}{4}$

CARD #2

LUNCH TIME FUN

Uh oh! It looks like there's been a food mix-up! Give the correct Foods to the kid below based on your knowledge of equivalent fractions. Write the answer(s) above each tray.

$\frac{3}{4}$

CARD #2

# 150+

## PRINT & DIGITAL GAMES

